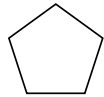
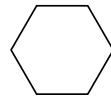


Perimeter of regular polygons



pentagon



hexagon



octagon

What is the perimeter of each of these shapes:

1. A pentagon with 7 cm sides.

2. A hexagon with 4 cm sides.

3. An octagon with 5 cm sides.

4. An equilateral triangle with 6 cm sides.

5. An octagon with 10 cm sides.

6. A pentagon with 20 cm sides.

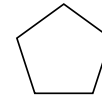
7. An equilateral triangle with 7 cm sides.

8. A hexagon with 9 cm sides.

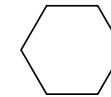


Equilateral triangles make superb parachutes!

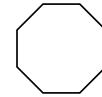
Perimeter of regular polygons



pentagon



hexagon



octagon

What is the perimeter of these shapes:

1. A pentagon with 4 cm sides.

2. A hexagon with 8 cm sides.

3. An octagon with 6 cm sides.


4. An equilateral triangle with 12 cm sides.

5. An octagon with 11 cm sides.

6. A pentagon with 30 cm sides.

7. An equilateral triangle with 9 cm sides.

8. A hexagon with 15 cm sides.



Up, up and away!