

Some school pupils were asked their favourite sport.
Their answers are shown below:

football, netball, athletics, netball, football
athletics, cricket, football, tennis, athletics
netball, football, athletics, football, cricket
cricket, football, tennis, netball, football
netball, athletics, football, athletics, netball
football, netball, netball, cricket, football

Here's a frequency table of the results:

Athletics	6
Cricket	4
Football	10
Netball	7
Tennis	2

There is a mistake in one row of the frequency table.
Which row is wrong:

- A athletics B cricket C football D netball
- E tennis

SPECIALIST CHARTS

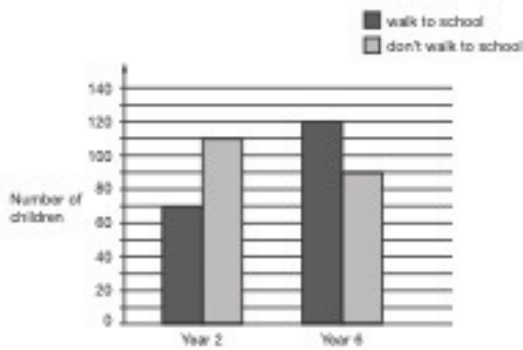
CONTENT DOMAIN REFERENCES:
4S1, 4S2

KS2 SATS

PRACTICE QUESTIONS BY TOPIC

1 William asks the children in Year 2 and Year 6 if they walk to school.

[2017] This graph shows the results.



Altogether, how many children don't walk to school?

How many more Year 6 children than Year 2 children walk to school?


[2 marks]

2

A school plans to collect £200 between January and May.

[2015]

This chart shows how much they collected by the end of April.



Write the name of each month where they collected more than £50

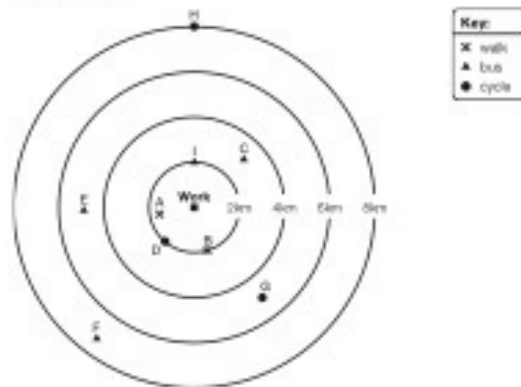
How much money did they collect in February and March altogether?

£

[2 marks]

3 This diagram shows how nine people travel to work and how far away they live.

[2013]



How many people live more than 4km from work?

 people

How far from work does person G live?

 km

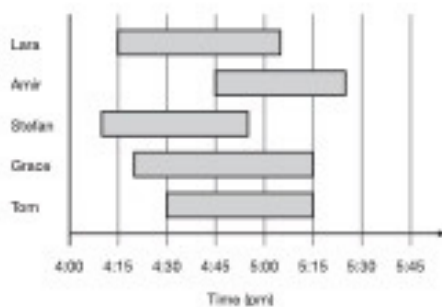
Write the letter of the person who lives 2km from work and cycles.

[3 marks]

4

This chart shows the times when 5 children were at a swimming pool one afternoon.

[2009]



Who was the next person to arrive after Stefan?

Who spent the longest time at the swimming pool?

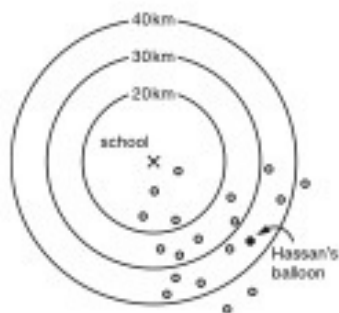
[2 marks]

5

[2007]

Class 6 launched some balloons at a school fete.

This diagram shows how far some of the balloons travelled.



How many balloons on the diagram travelled between 20km and 30km?

Estimate how far Hassan's balloon travelled.

 km

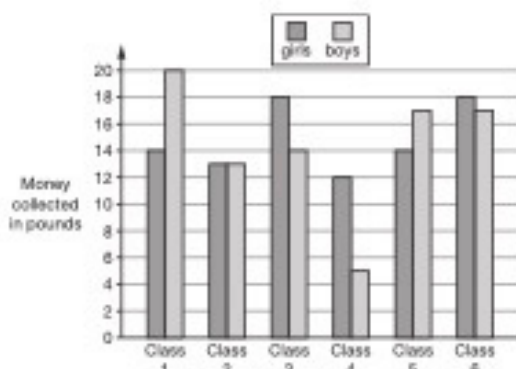
[2 marks]

6

[2015]

Six classes at Winward Primary School collected some money.

The chart shows how much money the boys and girls collected.



In Class 4, how much more money did the girls collect than the boys?

 £

How many classes collected more than £30?

 classes

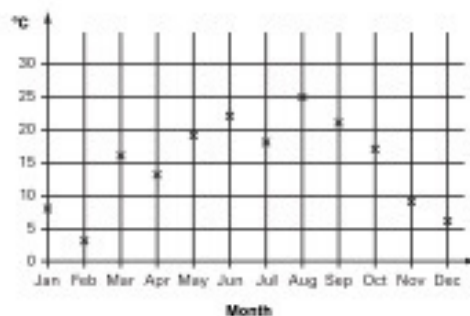
[2 marks]

7

[2004]

Abbie takes the temperature outside at midday on the first day of each month.

The graph shows her results from January to December.



How many months on the graph show a temperature between 18°C and 28°C?

Find the difference in temperature shown on the graph between July and August.

 degrees

[2 marks]

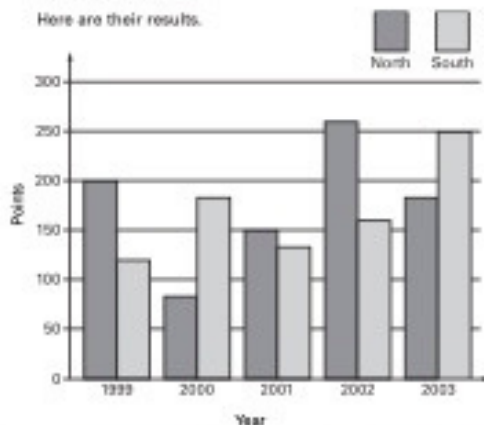
8

[2004]

A school has a quiz each year.

There are two teams.

Here are their results.



In which year did North beat South by 100 points?

In which year did South beat North by the greatest amount?

[2 marks]

Sentence Completion Exercise

In this exercise you have to choose the **best** word, or **group of words**, to complete the sentences so that they make sense and are written in correct English. You should choose one of the five answers and **mark its letter on your answer sheet**.

- 13 Yousef was upset because none of his friends
A B C D E
play basketball after school yesterday.
- 14 Every morning, very noisy alarm clock
A B C D E
wakes me up.
- 15 The books here are brand new, but in the far
A B C D E
cupboard are the old ones.
- 16 I all my homework now, so I'm allowed
A B C D E
to go out and play!
- 17 There were cars than normal on the motorway
A B C D E
today, so we made it to the theme park in good time!
- 18 coat is this?' asked Mrs Barker,
A B C D E
holding up the raincoat for us all to see.

12

(hole tunnel) (dig excavate)

A burrow B shelter C den D probe E gouge

13

(stick weapon) (association society)

A strike B bat C club D together E join

14

(blond pale) (just unbiased)

A white B honest C light D fair E objective

15

(chest case) (stem stalk)

A flower B crate C branch D trunk E box

16

(slab lump) (obstruct clog)

A congest B piece C block D jam E chunk

17

(swell ripple) (motion gesture)

A signal B surf C gush D wave E beckon

Mark each answer on the answer sheet.

1)

+	⊕	⊕
⊕	⊕	⊕
⊕	⊕	⊕

A	B	C	D	E

2)

○	●	●
●	○	●
○	○	●

A	B	C	D	E

3)

⊕	⊕	⊕
⊕	⊕	⊕
⊕	⊕	⊕

A	B	C	D	E

4)

⊕	⊕	⊕
⊕	⊕	⊕
⊕	⊕	⊕

A	B	C	D	E

5)

○	○	○
○	○	○
○	○	○

A	B	C	D	E

Mark each answer on the answer sheet.

6)

⊕	⊕	⊕
⊕	⊕	⊕
⊕	⊕	⊕

A	B	C	D	E

7)

⊕	⊕	⊕
⊕	⊕	⊕
⊕	⊕	⊕

A	B	C	D	E

8)

⊕	⊕	⊕
⊕	⊕	⊕
⊕	⊕	⊕

A	B	C	D	E

9)

○	⊕	⊕
⊕	⊕	⊕
○	⊕	⊕

A	B	C	D	E

10)

○	○	○
○	○	○
○	○	○

A	B	C	D	E